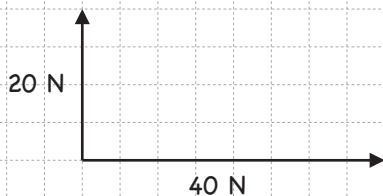


Resultantbestämning II

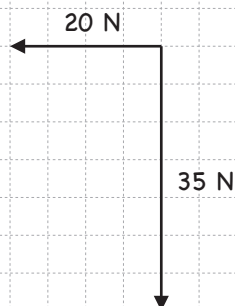
Namn: _____

Bestäm resultanten! (1 cm motsvarar 1 N)

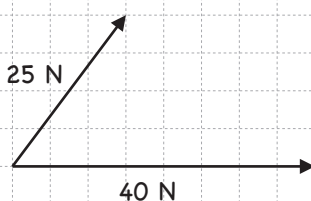
(a)



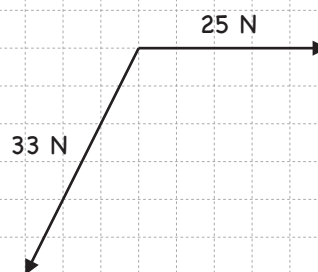
(b)



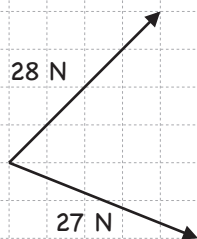
(c)



(d)



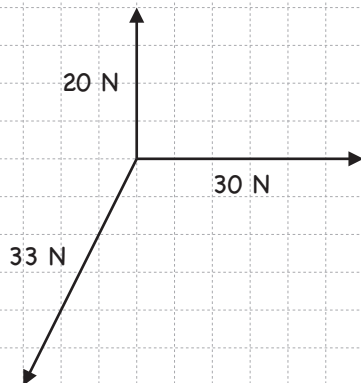
(e)



(f)



(e)



(f)

