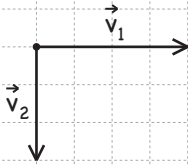


Vektorsubtraktion

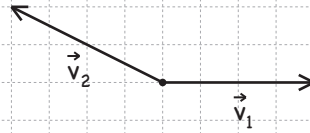
Namn: _____

Bestäm storlek (genom mätning i figuren) och riktning hos $\Delta\vec{v} = \vec{v}_2 - \vec{v}_1$ i de olika fallen nedan.
1 cm motsvarar 10 m/s.

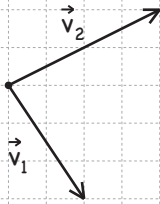
(a)



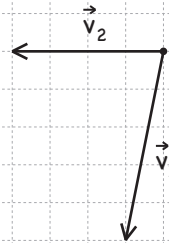
(b)



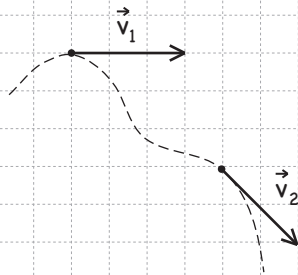
(c)




(d)



(e)



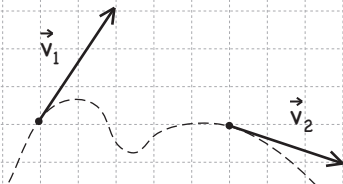
(f)



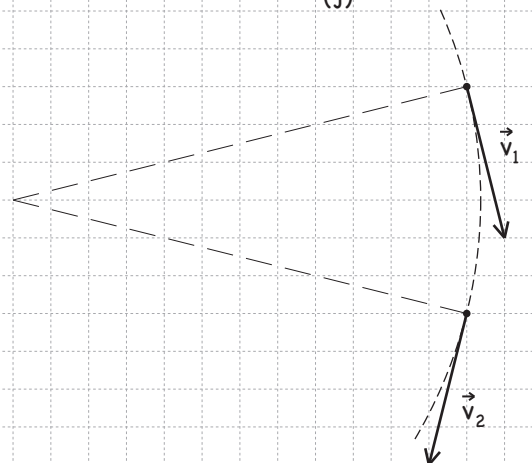
(g)



(h)



(j)



(i)

