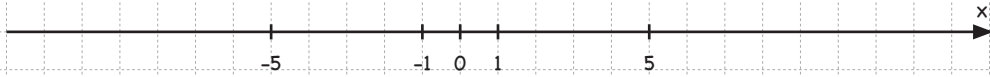


Intervall

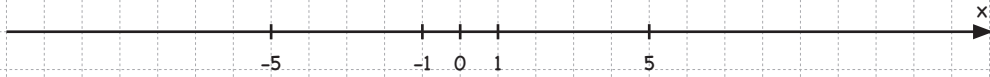
Namn: _____

1 Markera följande intervall på den inritade tallinjen.

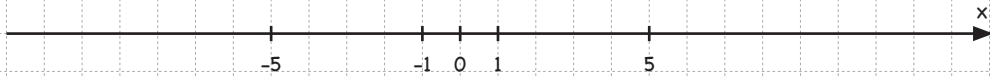
(a) $x > 4$



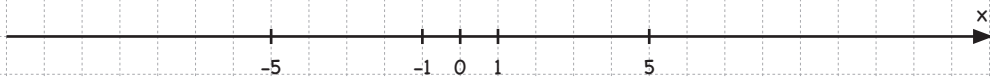
(b) $x \leq 3$



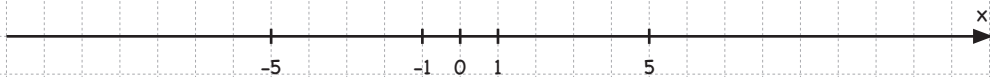
(c) $x \geq -1$



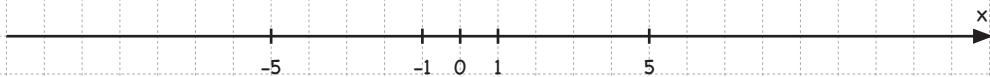
(d) $1 < x < 4$



(e) $-2 \leq x < 4$

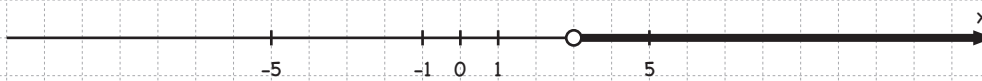


(f) $-6 < x \leq 0$



2 Nedan är olika intervall markerade på tallinjen. Beskriv de olika intervallen med olikheter.

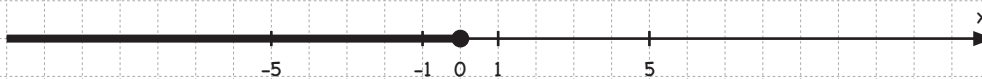
(a)



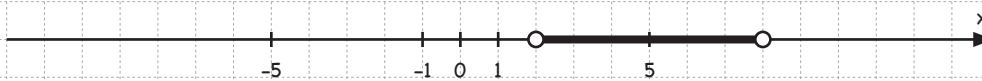
(b)



(c)



(d)



(e)



(f)

